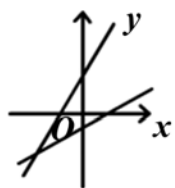
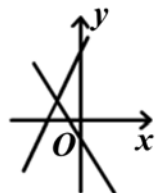




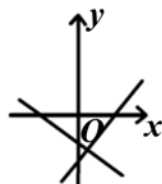
例4. 直线 $y = ax + b$ 和 $y = bx + a$ 在同一坐标系中的图形可能是( )



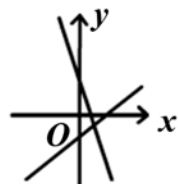
A



B



C



D

例8. 求经过两直线 $2x + y - 8 = 0$ 与 $x - 2y + 1 = 0$ 的交点, 且在y轴上的截距为x轴上截距的两倍的直线 $l$ 的方程.